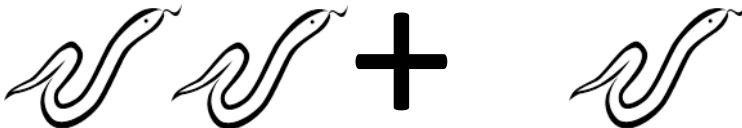



Zoo Keeper Maths

Zoo Keepers use maths throughout the day to help them in their job.

Help the Zoo Keepers complete their daily tasks.



Task 1: Count the animals

 $+$  $=$

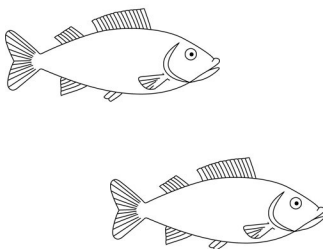
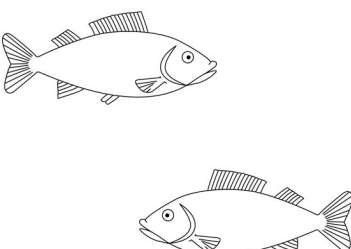
3

 $+$  $=$

5

 $+$  $=$

2

 $+$  $=$

4

How many animals are there in total?

14

Task 2: Feed the animals

Menu:	
Snakes	1 mouse each
Lizards	1 apple and 1 carrot each
Spiders	5 crickets each
Fish	10 crickets each

Count how much of each food item you would need to order to feed all of the animals that you counted in Task 1.

Don't forget to double check your food order so that all of the animals get the correct food!

Food	Number Needed
Mice	3
Apples	5
Carrots	5
Crickets	50
Ice Cream	0



Task 3: Measure the animals

Zoo Keepers need to measure their animals to make sure that they are a healthy weight and size

Lizard	Age	Sex	Weight	Length
A	2	M	2.0 kg	90 cm
B	5	M	4.5 kg	135 cm
C	1	F	1.0 kg	60 cm
D	6	F	3.5 kg	115 cm
E	4	F	2.5 kg	100 cm

Which Lizard is the heaviest in weight?

B

Which Lizard is the shortest in length?

C

How many male Lizards are there?

2